

**Úlohy pre žiakov II. ročníka v týždni od 25. 5. - 29. 5. 2020 z predmetu
Matematika**

Téma: Sčítanie a odčítanie prirodzených čísel v obore do 100.

Milí žiaci, posielam Vám úlohy na tento týždeň.

1. Dopln číselný rad do 100

1					6				10
		13				17			
21			24				28		30
	32				36			39	
			44				48		
51		53		55				59	
	62		64			67			70
		73			76				
81			84	85			88		
	92					97		99	

2. Vyrieš slovnú úlohu:

Ferko mal v peňaženke 60 centov. Mamička mu dala ešte 30 centov.

Koľko centov má spolu?


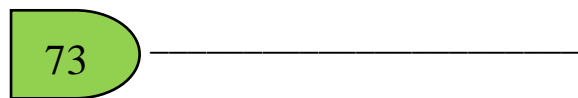
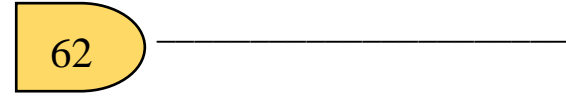
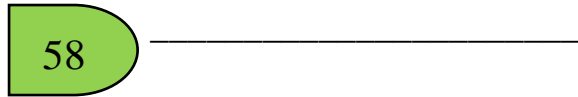
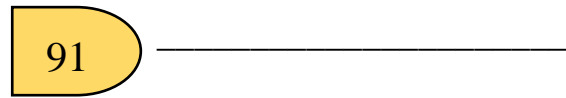
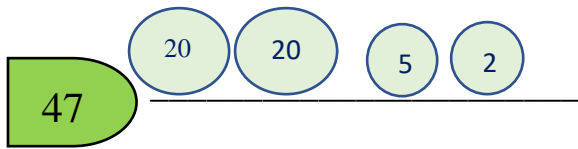
V peňaženke c

Dala c

Spolu? _____

Ferko má spolu centov.

1. Zaplat' mincami, pokračuj podľa vzoru:



2. Oprav chyby:

$21 + 5 = 24$ _____

$32 - 7 = 20$ _____

$50 + 6 = 56$ _____

$37 + 5 = 43$ _____

$42 - 3 = 39$ _____

$74 + 6 = 82$ _____

$49 + 4 = 55$ _____

$56 - 6 = 50$ _____

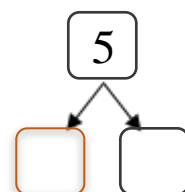
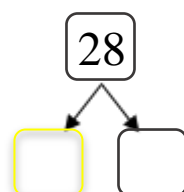
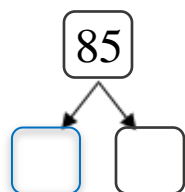
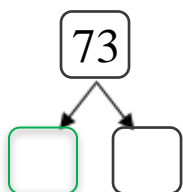
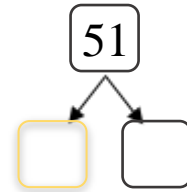
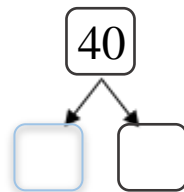
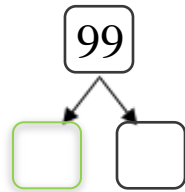
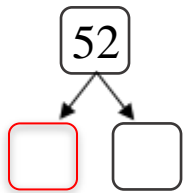
$39 - 5 = 34$ _____

$46 + 6 = 52$ _____

$74 - 5 = 68$ _____

$82 - 4 = 80$ _____

3. Rozdeľ čísla na jednotky a desiatky:



1. Doplň znamienka +, -

30  30 = 0

50  20 = 70

80  30 = 50

80  20 = 60

90  10 = 100

50  0 = 50

50  10 = 40

20  70 = 90

100  20 = 80

60  30 = 30

30  60 = 90

70  50 = 20

2. Porovnaj < > =

12		20		56		42		46
25		52		61		16		10
36		13		29		29		90
40		39		48		24		12
50		20		17		18		38
100		100		98		92		72

3. Pokračuj:

2, 4, 6, 8, _____, _____, _____, _____, _____

3, 6, 9, 12, _____, _____, _____, _____, _____

20, 18, 16, _____, _____, _____, _____, _____

10, 20, 30, 40, _____, _____, _____, _____, _____

Nácvik osovej súmernosti. Dokresli:

